


Liite 1a: Lukumääriä

Ni-mi _____


1. Kuinka monta? Ympyröi luku.




1 2 3 4 5 6 7




1 2 3 4 5 6 7




4 5 6 7 8 9 10



1 2 3 4 5 6 7



1 2 3 4 5 6 7



4 5 6 7 8 9 10

2. Tee samanlaisia.

