

1. Piirrä oikea määrä palloja. Yhdistä luku-suoraan.

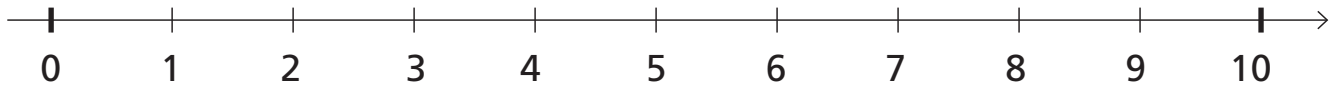





kak-si

nel-jä

vii-si

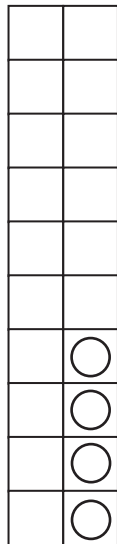
seit-se-män

yh-dek-sän

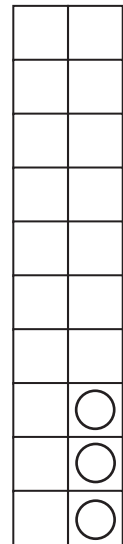


2. Piirrä Kas-sen pal-lot.

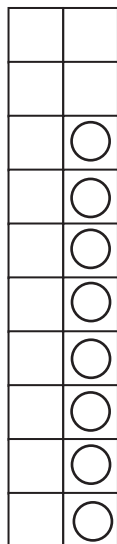
Hii-rel-lä on 4 pal-lo-a. Mi-nul-la on 3 pal-lo-a e-nem-män.



Hii-rel-lä on 3 pal-lo-a. Mi-nul-la on 6 pal-lo-a e-nem-män.



Hii-rel-lä on 8 pal-lo-a. Mi-nul-la on 5 pal-lo-a vä-hem-män.



Hii-rel-lä on 9 pal-lo-a. Mi-nul-la on 7 pal-lo-a vä-hem-män.

