


7

Harjoitellaan ankkurilukuja 5, 10, 15, 20

Nimi: _____



1. Ratkaise puuttuva luku. Merkitse luku helminauhaan.

$$9 = 5 + \square$$



$$12 = 10 + \square$$



$$14 = 10 + \square$$



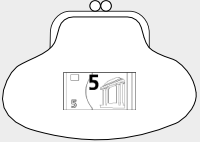
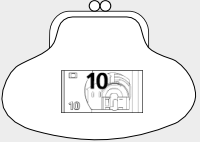
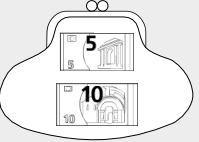
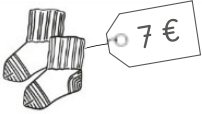
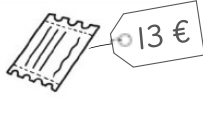
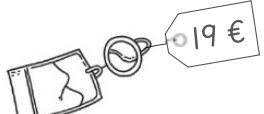
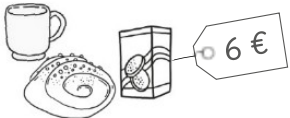
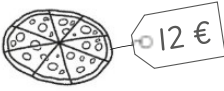
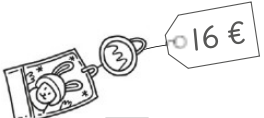
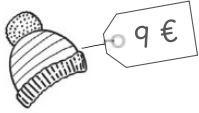

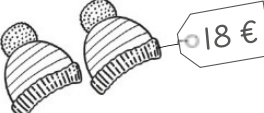
$$15 = 10 + \square$$



$$19 = 10 + \square$$



2. Kuinka monta euroa tarvitaan liisää?

 ra-haa on 5 €	 ra-haa on 10 €	 ra-haa on 15 €
 $5 \text{ €} + \square \text{ €} = 7 \text{ €}$	 $10 \text{ €} + \square \text{ €} = 13 \text{ €}$	 $15 \text{ €} + \square \text{ €} = 19 \text{ €}$
 $5 \text{ €} + \square \text{ €} = 6 \text{ €}$	 $10 \text{ €} + \square \text{ €} = 12 \text{ €}$	 $15 \text{ €} + \square \text{ €} = 16 \text{ €}$
 $5 \text{ €} + \square \text{ €} = 9 \text{ €}$	 $10 \text{ €} + \square \text{ €} = 14 \text{ €}$	 $15 \text{ €} + \square \text{ €} = 18 \text{ €}$