




22

Yhtä suuria osia

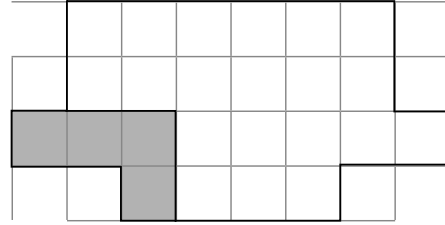
Nimi:

1. Jaa alue ruutuviivoja pitkin

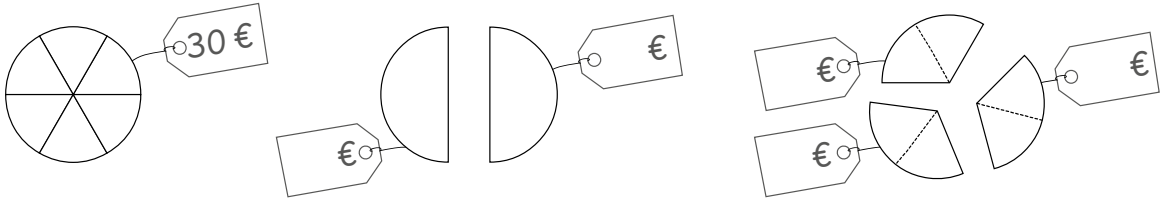
- neljään samanlaiseen osaan



- kuuteen samanlaiseen osaan.

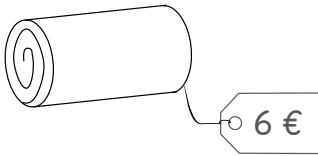


2. Kokonainen piirakka maksaa 30 €. Hinnoittele palat.

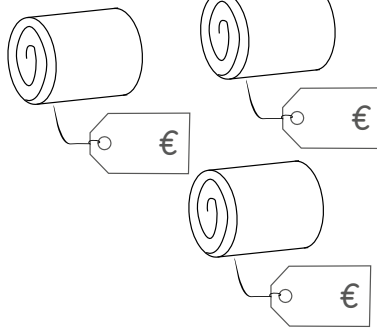


3. Kokonainen kääretorttu maksaa 12 €. Hinnoittele palat.

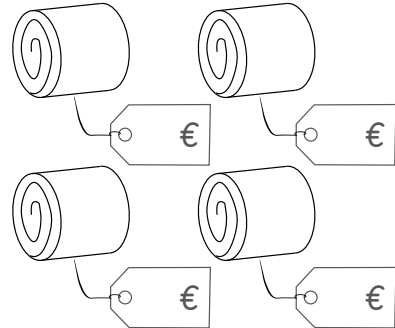
puolikas



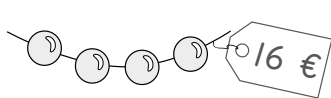
kolmasosa



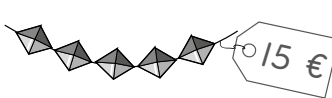
neljäsosa



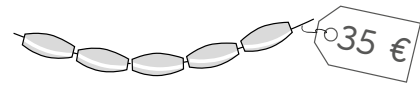
4. Laske yhden helmen hinta.



$$\text{○} = \text{_____} \text{ €}$$



$$\text{◇} = \text{_____} \text{ €}$$



$$\text{◐} = \text{_____} \text{ €}$$

5. Piirrä neljäs kuvio.

