


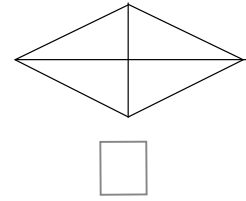
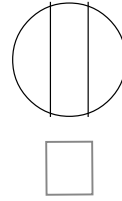
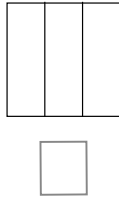
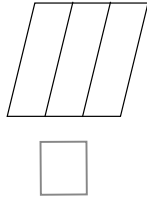
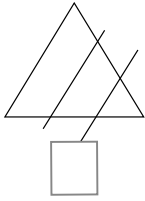
22

Yhtä suuria osia

Nimi:

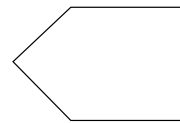
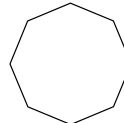
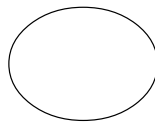



1. Mitkä kuviot on jaettu kolmeen yhtä suureen osaan? Merkitse X.

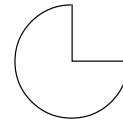
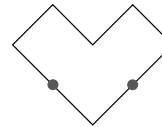
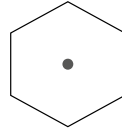
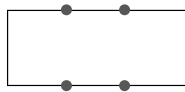


2. Jaa kuvio

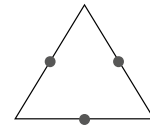
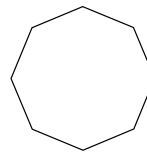
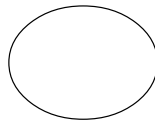

kahteen yhtä
suureen osaan



kolmeen yhtä
suureen osaan

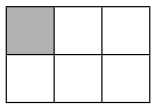

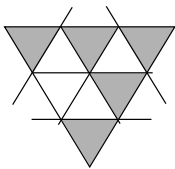
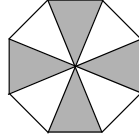


neljään yhtä
suureen osaan.



Väritä jokaisesta kuviosta yksi osa.

3. Täydennä osien määrät taulukkoon.

				
värillisiä osia				
osia yhteensä				