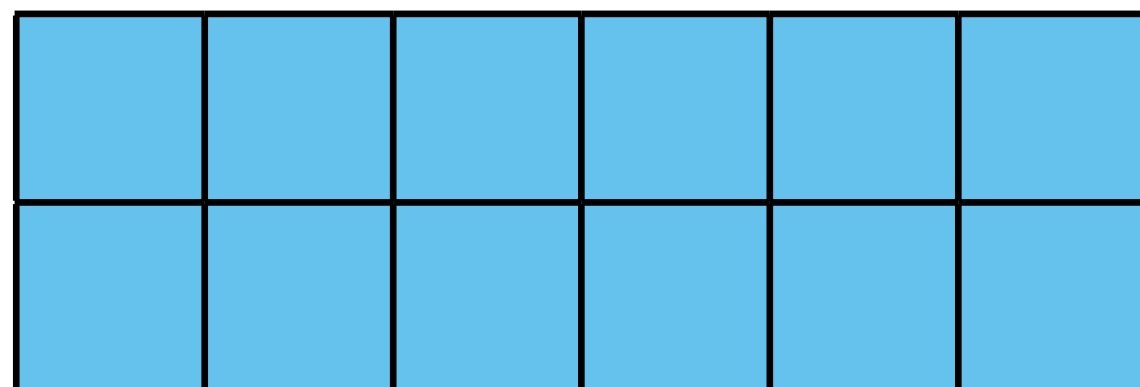





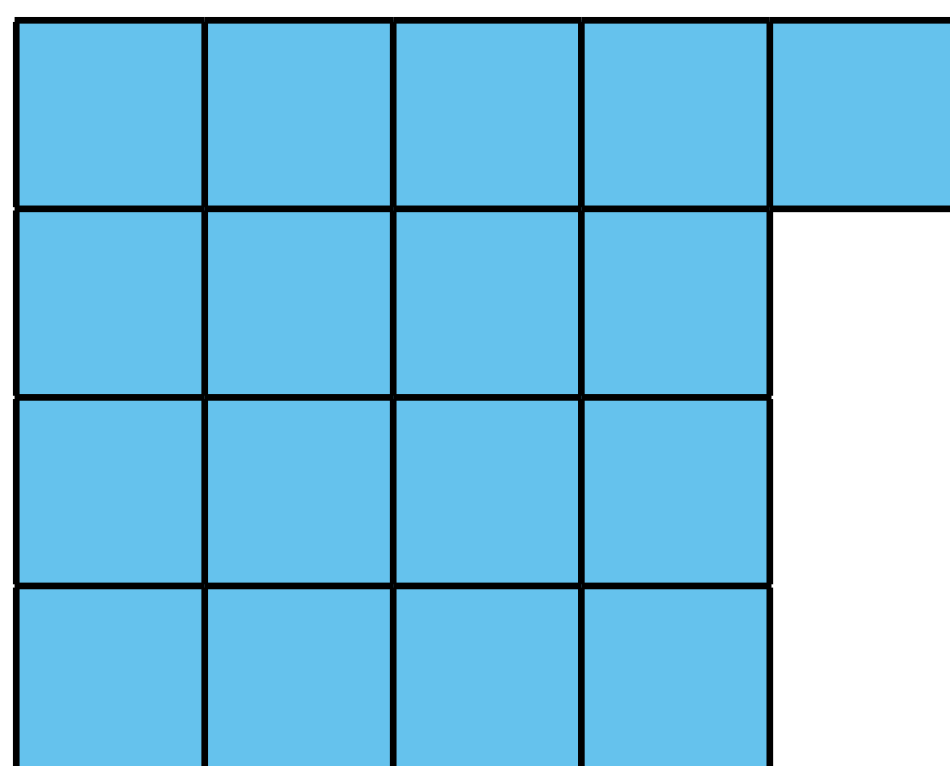
Kotitehtäviä

27

1. Laske suorakulmion pinta-ala neliösenttimetreinä.







2. Laske.

$$3 \cdot 8 = \underline{\quad}$$

$$4 \cdot 7 = \underline{\quad}$$

$$3 \cdot 9 = \underline{\quad}$$

$$4 \cdot 8 = \underline{\quad}$$

$$5 \cdot 7 = \underline{\quad}$$

$$5 \cdot 5 = \underline{\quad}$$

$$6 \cdot 6 = \underline{\quad}$$

$$7 \cdot 7 = \underline{\quad}$$

$$8 \cdot 8 = \underline{\quad}$$

$$9 \cdot 9 = \underline{\quad}$$



Edellinen

Seuraava

Näytä kaikki