
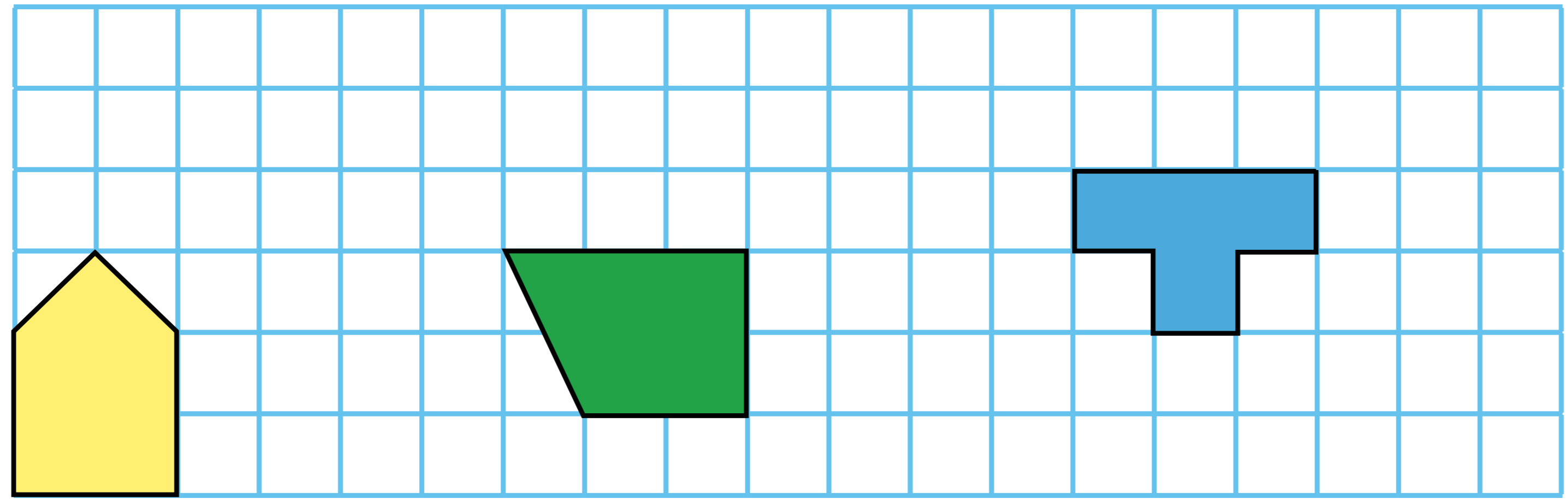




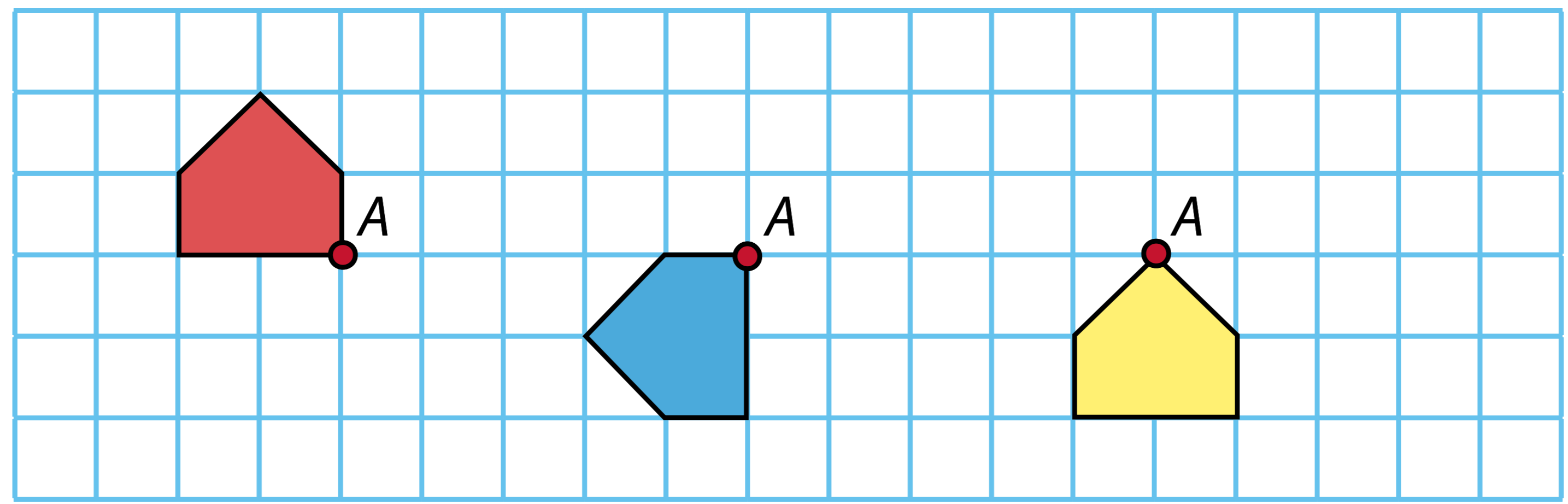
Kotitehtäviä 26



1. Siirrä kuvioita 3 → 2 ↑.



2. Kierrä kuvioita pisteen A suhteen puoli kierrosta.



3. Laske.

- $7 \cdot 6 - 4 = \underline{\hspace{2cm}}$
- $8 \cdot 9 - 4 = \underline{\hspace{2cm}}$
- $7 \cdot 8 - 8 = \underline{\hspace{2cm}}$
- $9 \cdot 6 - 6 = \underline{\hspace{2cm}}$

- $7 \cdot 2 \cdot 3 = \underline{\hspace{2cm}}$
- $2 \cdot 8 \cdot 4 = \underline{\hspace{2cm}}$
- $3 \cdot 3 \cdot 9 = \underline{\hspace{2cm}}$
- $3 \cdot 2 \cdot 8 = \underline{\hspace{2cm}}$
- $7 \cdot 4 \cdot 5 = \underline{\hspace{2cm}}$