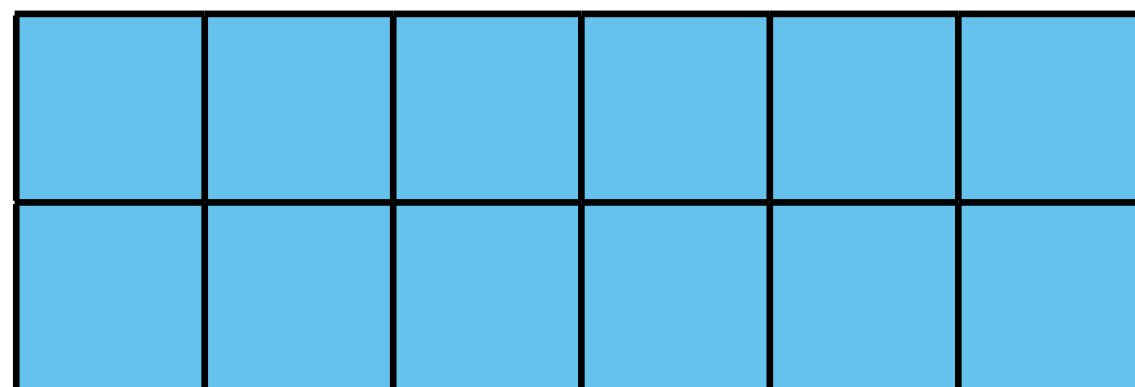


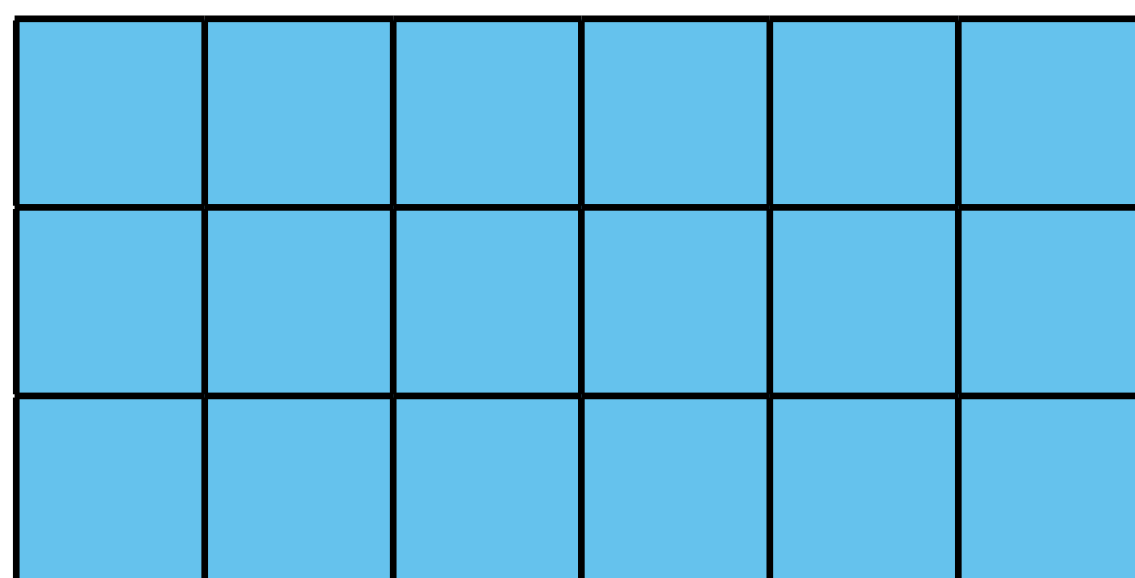


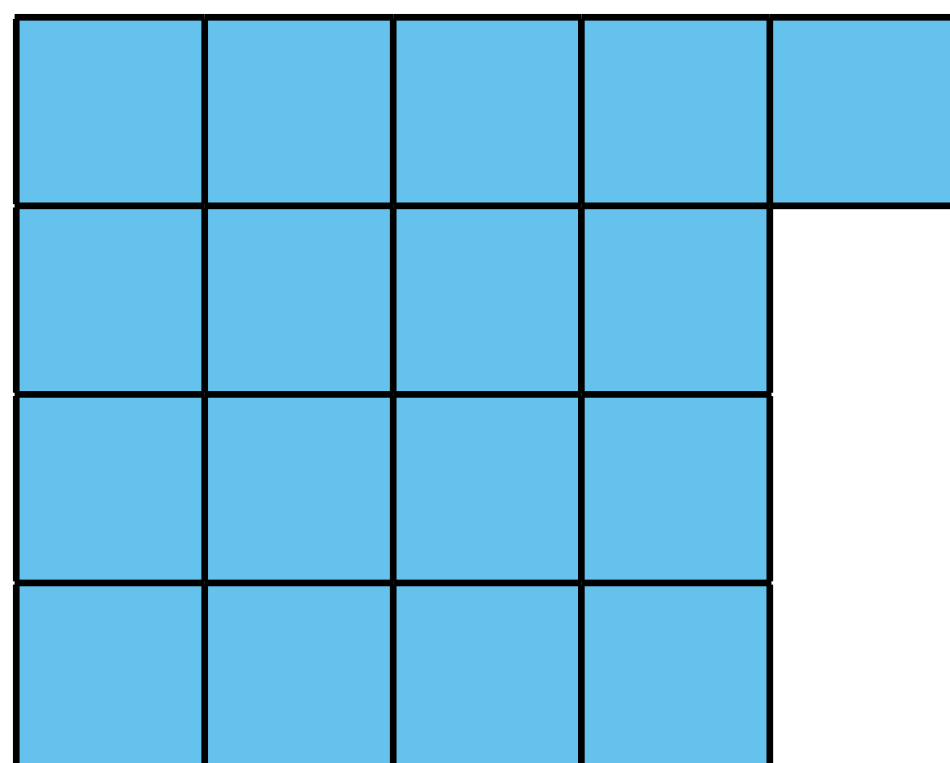
Kotitehtäviä

27

1. Laske suorakulmion pinta-ala neliösenttimetreinä.







2. Täydennä.

$$81 : 9 = 13 - \underline{\quad}$$

$$56 : 8 = 11 - \underline{\quad}$$

$$49 : 7 = 12 - \underline{\quad}$$

$$54 : 6 = 14 - \underline{\quad}$$

$$63 : 9 = 15 - \underline{\quad}$$

$$36 : 6 = 48 : \underline{\quad}$$

$$72 : 9 = 64 : \underline{\quad}$$

$$63 : 7 = 45 : \underline{\quad}$$

$$42 : 6 = 35 : \underline{\quad}$$

$$64 : 8 = 40 : \underline{\quad}$$



Edellinen

Seuraava

Näytä kaikki