

Nimi: _____

Nähty: _____

Pisteet: _____ /30

1. Pääsälaskut

a. _____

b. _____

c. _____

/3

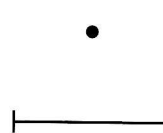
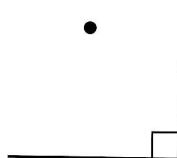
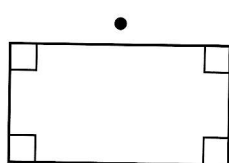
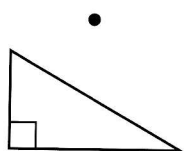
2. Yhdistä viivalla nimi ja kuvio.

Suora-
kulmio

Jana

Suorakulmainen
kolmio

Suora
kulma






/4

3. Piirrä

a. tylppä kulma A.

b. teräväkulmainen kolmio DEF.

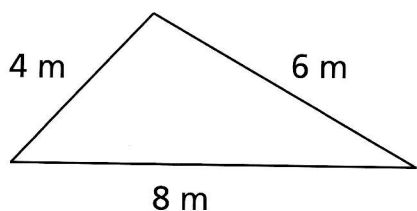
c. piste D ja sen kautta kulkeva suora n.



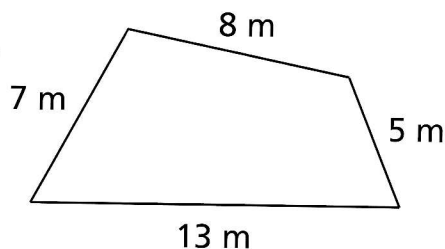
/6

4. Merkitse lasku ja laske kuvion piiri.

a.



b.



p = _____

p = _____

/4