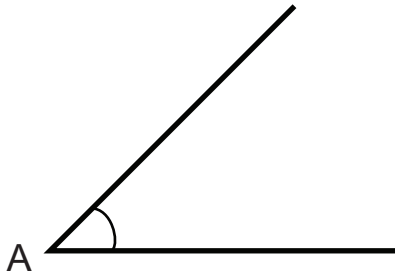


Treeni 1

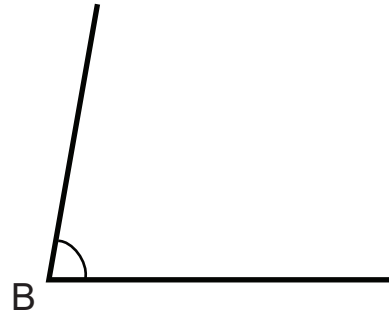
Mittaa kulmien suuruudet piirtokolmiolla.

a)



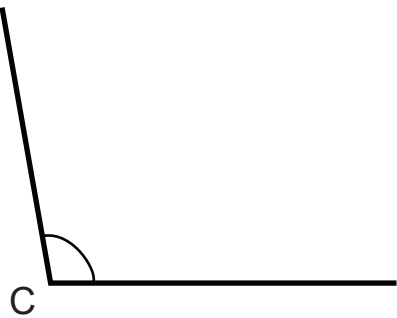
A = _____ °

b)



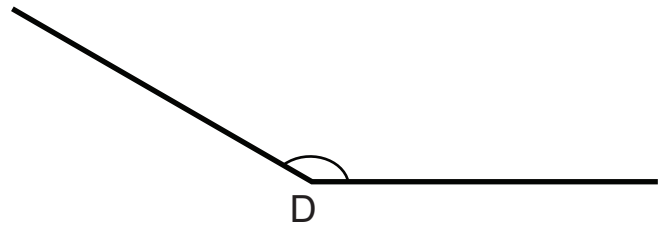
B = _____ °

c)



C = _____ °

d)

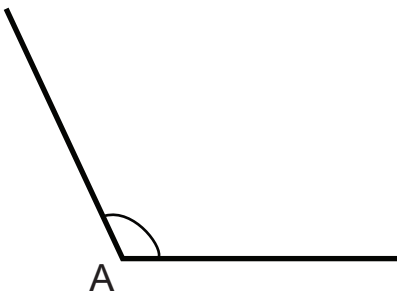


D = _____ °

Treeni 2

Mittaa kulmien suuruudet piirtokolmiolla.

a)



A = _____ °

b)



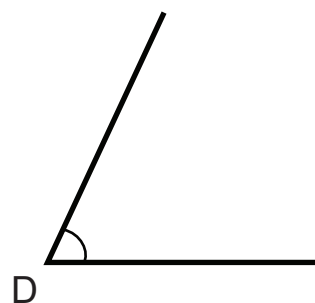
B = _____ °

c)



C = _____ °

d)

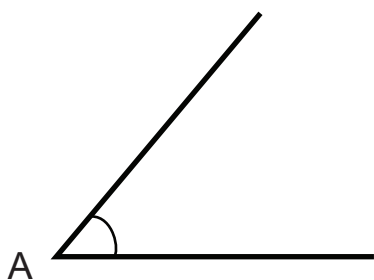


D = _____ °

Kotiboksi 1

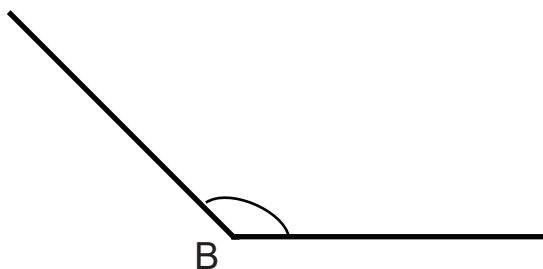
Mittaa kulmien suuruudet piirtokolmiolla.

a)



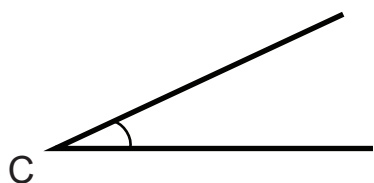
A = _____ °

b)



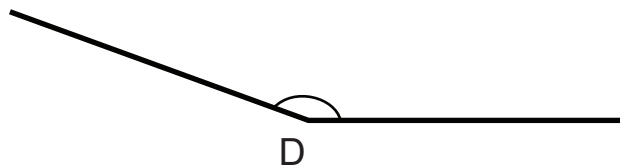
B = _____ °

c)



C = _____ °

d)



D = _____ °