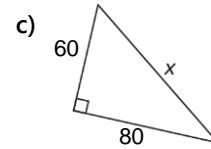
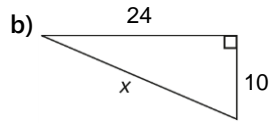
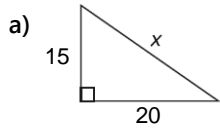
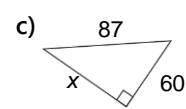
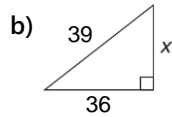
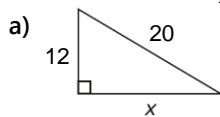


Tehtäviä Pythagoraan lauseesta (kpl 7 ja 8)

1. Laske hypotenuusan x pituus.



2. Laske kateetin x pituus.



3. Suorakulmaisen kolmion kateettien pituudet ovat 56 cm ja 61 cm. Laske hypotenuusan pituus. (Piirrä tilanteesta mallikuvio.)