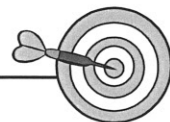


# 41 Harjoituksia testin tehtäviin 1-2 Nimi \_\_\_\_\_



## 1. Laske.

$8 - 9 = \underline{\quad}$

$-4 - 7 = \underline{\quad}$

$-5 + 8 = \underline{\quad}$

$10 - 12 = \underline{\quad}$

$-4 + 7 = \underline{\quad}$

$-5 - 8 = \underline{\quad}$

$-7 - 5 = \underline{\quad}$

$6 - 8 = \underline{\quad}$

$6 - 9 = \underline{\quad}$

$-3 + 7 = \underline{\quad}$

$-8 + 3 = \underline{\quad}$

$-9 + 9 = \underline{\quad}$

$-4 + 6 + 4 - 5 - 2$

$4 - 4 - 5 + 2 - 5$

$-7 + 7 - 8 + 7 + 1$

\_\_\_\_\_

\_\_\_\_\_

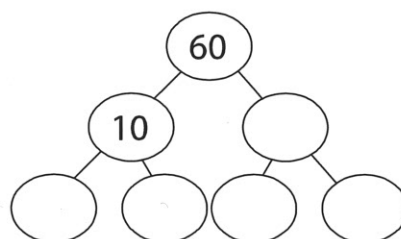
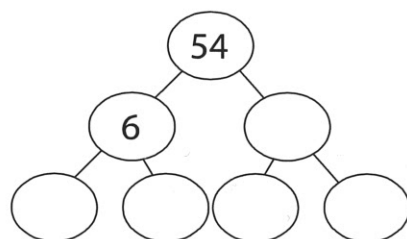
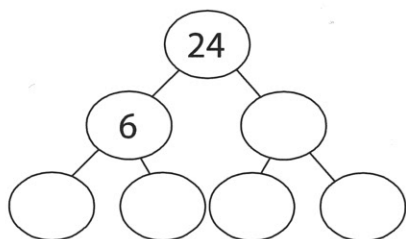
\_\_\_\_\_

\_\_\_\_\_

\_\_\_\_\_

\_\_\_\_\_

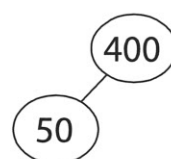
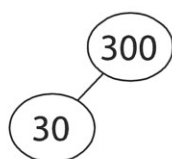
## 2. Täydennä malli ja merkitse luku alkutekijöidensä tulona.



\_\_\_\_\_

\_\_\_\_\_

\_\_\_\_\_



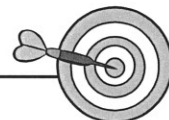
\_\_\_\_\_

\_\_\_\_\_



# 41 Harjoituksia testin tehtäviin 3–5

Nimi \_\_\_\_\_



## 1. Laske.

$8 \cdot 0,8 = \underline{\hspace{2cm}}$

$0,5 \cdot 0,3 = \underline{\hspace{2cm}}$

$1,32 : 2 = \underline{\hspace{2cm}}$

$7 \cdot 0,6 = \underline{\hspace{2cm}}$

$0,6 \cdot 0,2 = \underline{\hspace{2cm}}$

$2,55 : 3 = \underline{\hspace{2cm}}$

$10 \cdot 1,3 = \underline{\hspace{2cm}}$

$0,4 \cdot 0,8 = \underline{\hspace{2cm}}$

$3,76 : 4 = \underline{\hspace{2cm}}$

$100 \cdot 0,2 = \underline{\hspace{2cm}}$

$0,2 \cdot 2,1 = \underline{\hspace{2cm}}$

$4,25 : 5 = \underline{\hspace{2cm}}$

## 2. Lavenna ja laske.

$0,25 : 0,5$

$3,5 : 0,05$

$3,6 : 0,04$

\_\_\_\_\_

\_\_\_\_\_

\_\_\_\_\_

$0,6 : 0,2$

$1,2 : 0,06$

$0,24 : 0,3$

\_\_\_\_\_

\_\_\_\_\_

\_\_\_\_\_

### 3. Papujen kilohinta on 6 €.

Kuinka paljon maksaa

0,2 kg papuja

\_\_\_\_\_

0,7 kg papuja

\_\_\_\_\_

1,5 kg papuja?

\_\_\_\_\_

### 4. Manteleiden kilohinta on 20 €.

Kuinka paljon maksaa

0,3 kg manteleita

\_\_\_\_\_

0,8 kg manteleita

\_\_\_\_\_

1,2 kg manteleita?

\_\_\_\_\_

### 5. Irtokarkki maksaa 0,05 €.

Kuinka monta karkkia saa

2,10 eurolla \_\_\_\_\_

\_\_\_\_\_

4,65 eurolla? \_\_\_\_\_

\_\_\_\_\_

### 6. Irtokarkki maksaa 0,20 €.

Kuinka monta karkkia saa

2,40 eurolla \_\_\_\_\_

\_\_\_\_\_

6,80 eurolla? \_\_\_\_\_

\_\_\_\_\_