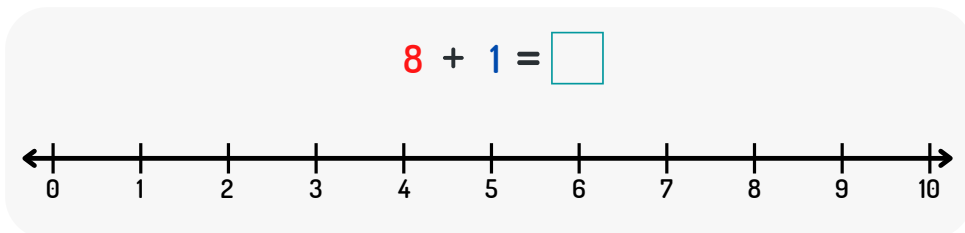
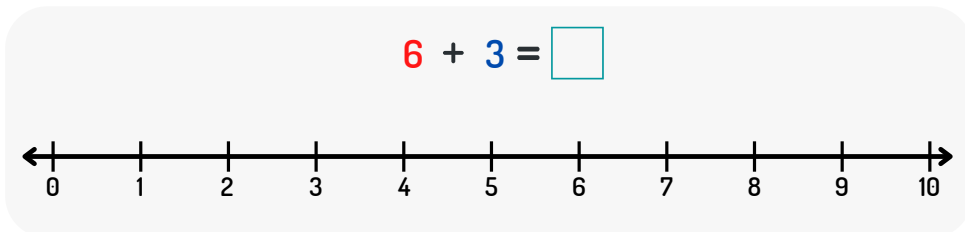
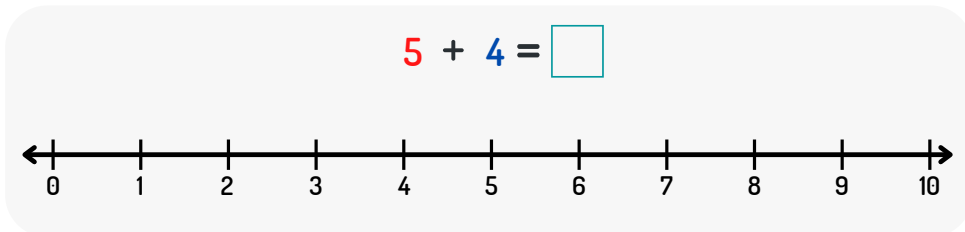
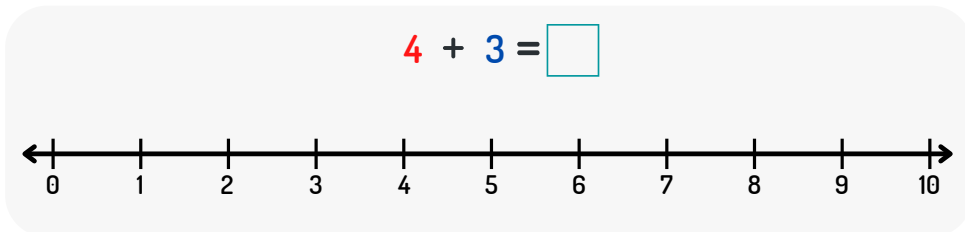
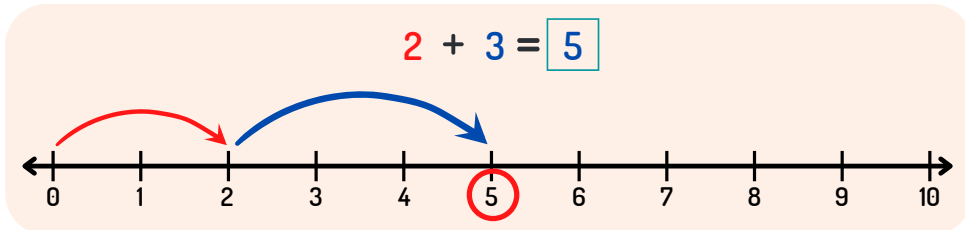


Yhteenlasku

+

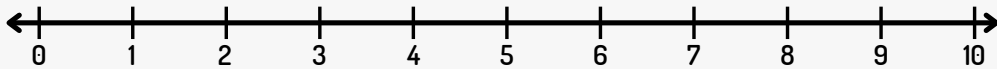
Lukusuora

- Näytä laskut lukusuorilla

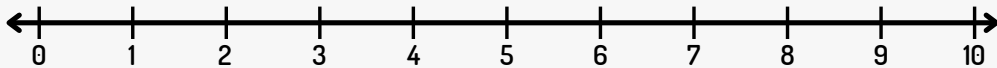


Lukusuora

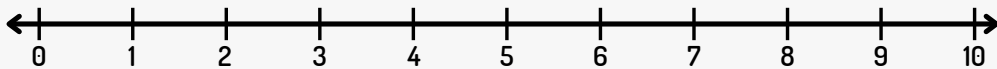
$$2 + 2 + 2 = \square$$



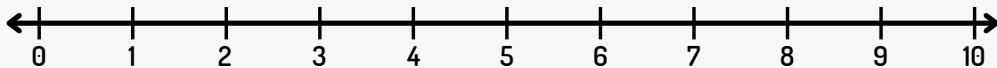
$$4 + 1 + 3 = \square$$



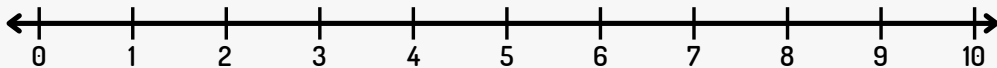
$$5 + 4 + 1 = \square$$



$$2 + 4 + 3 = \square$$



$$1 + 1 + 1 = \square$$

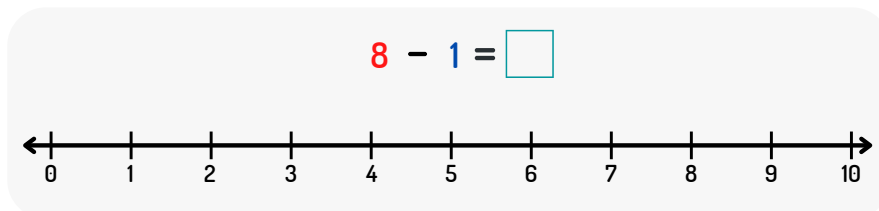
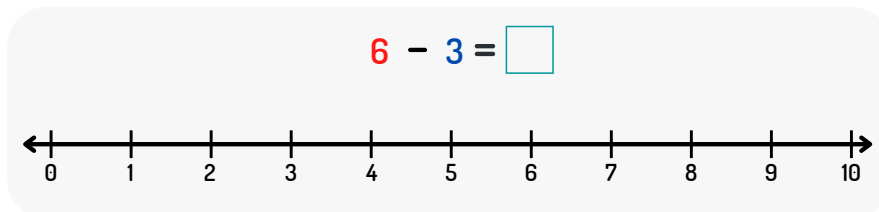
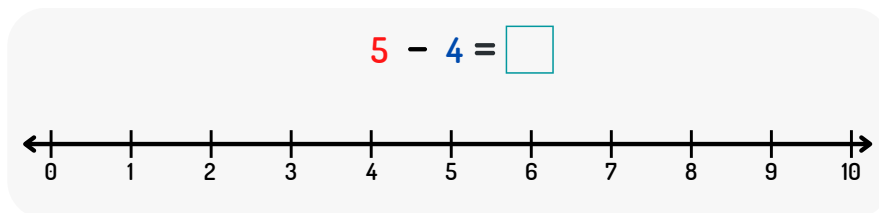
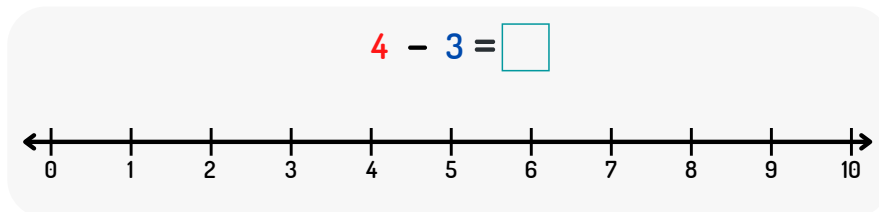
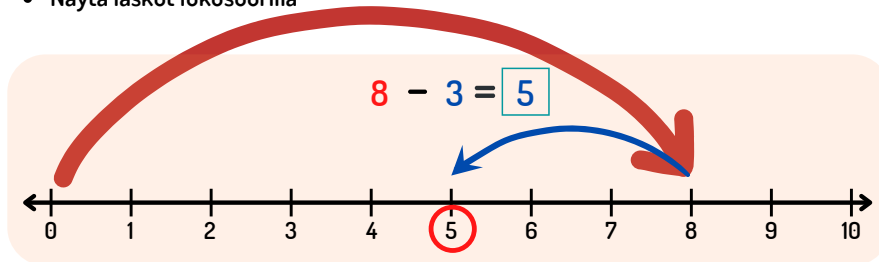


Vähennyslasku

—

Vähennyslasku lukusuoralla

- Näytä laskut lukusuorilla



YHTEEN- JA VÄHENNYSLASKU

Käytä lukujanaa löytääksesi positiiviset ja negatiiviset vastaukset

$$-8 + 9 - 2 = \underline{\quad}$$

$$-6 + 7 - 1 = \underline{\quad}$$

$$-5 + 7 - 4 = \underline{\quad}$$

$$2 + 8 - 6 = \underline{\quad}$$

$$-5 - 3 + 9 = \underline{\quad}$$

$$-6 - 3 - 2 = \underline{\quad}$$

$$9 - 4 - 5 = \underline{\quad}$$

$$9 - 9 - 5 = \underline{\quad}$$

