
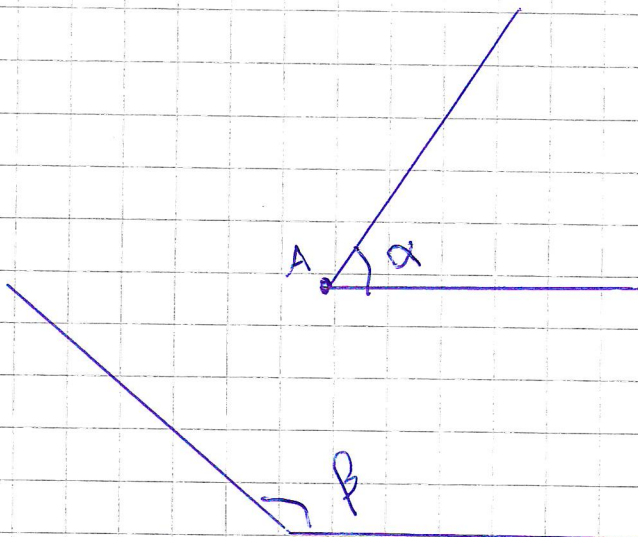


# Kulma

s. 102 105



Suora kulma  
 $90^\circ$



terävä kulma  
 $< 90^\circ$   
pienempi kuin  $90^\circ$

typpä kulma  
 $> 90^\circ$   
suurempi kuin  $90^\circ$

Kulmien nimet  $\alpha, \beta, \gamma, \delta$


Alfa  
Beta  
gamma  
delta

Oikokulma  
 $180^\circ$




$180^\circ < \alpha < 360^\circ$

nollakulma  
 $0^\circ$



Kupera kulma  
suurempi  
kuin  $180^\circ$

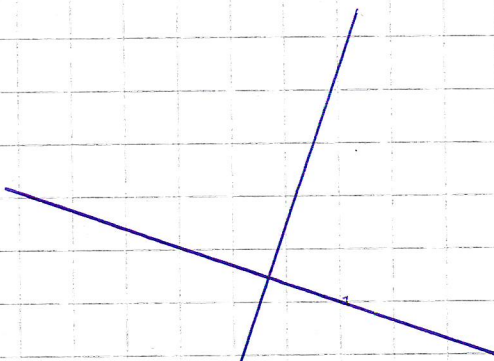
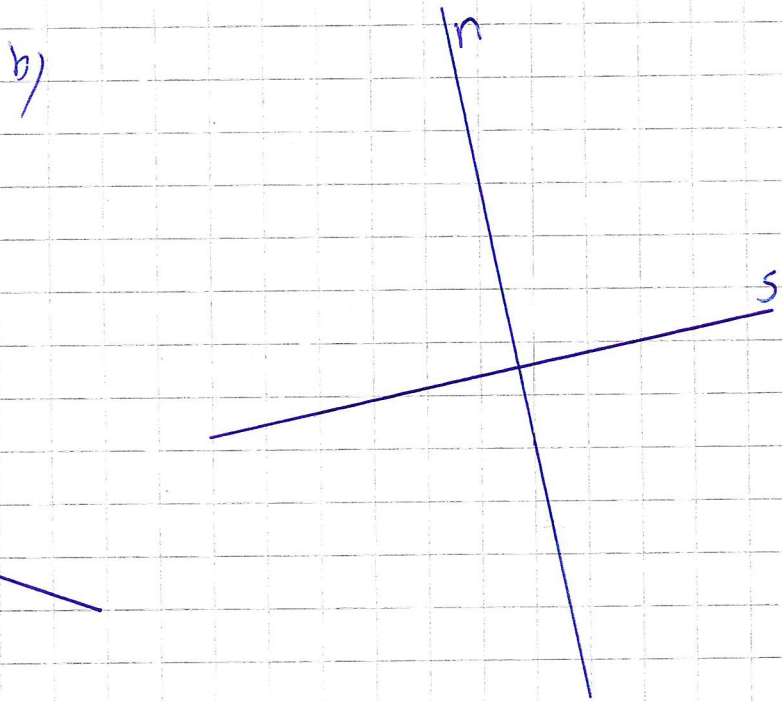
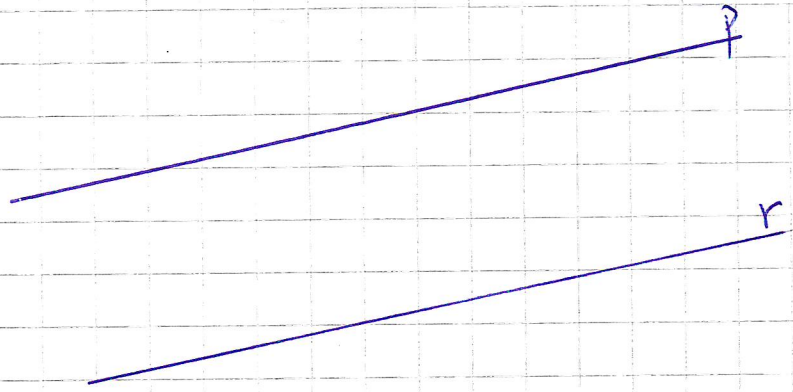


$360^\circ$

täysikulma

s. 106 t. 515

S. 98 480/ a)



481)

